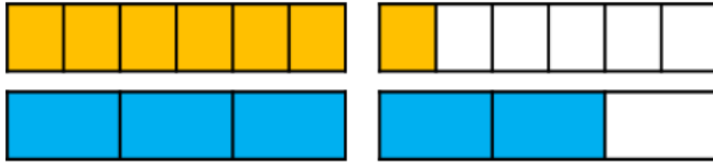


Use bar models to compare $\frac{7}{6}$ and $\frac{5}{3}$

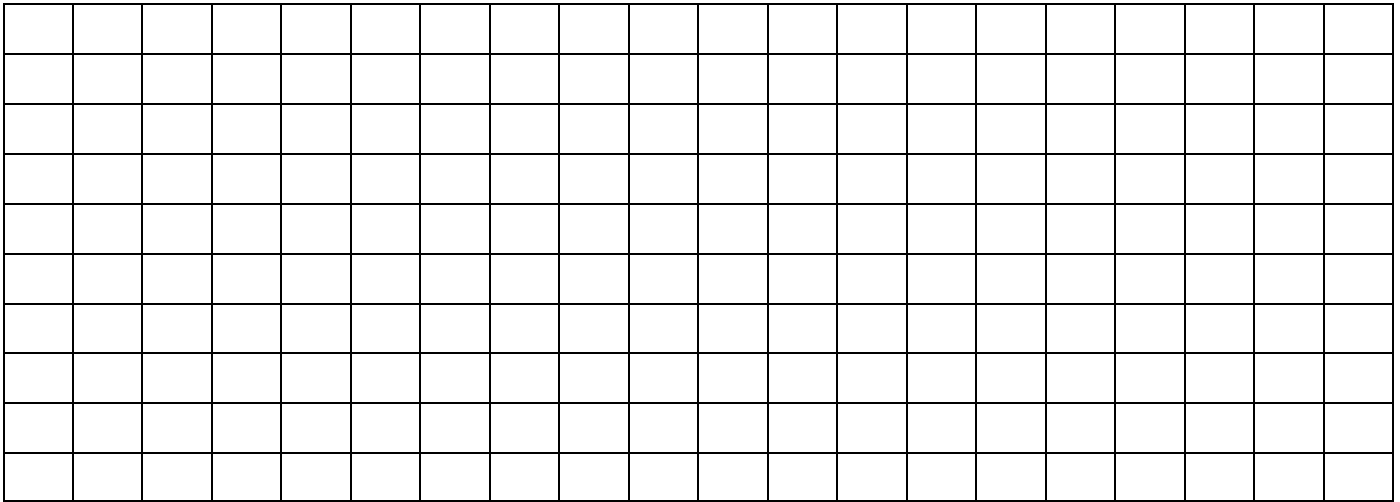


>

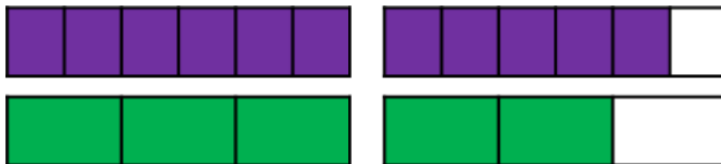
<

Use this method to help you compare:

$\frac{5}{2}$ and $\frac{9}{4}$ $\frac{11}{6}$ and $\frac{5}{3}$ $\frac{9}{4}$ and $\frac{17}{8}$



Use a bar model to compare $1\frac{2}{3}$ and $1\frac{5}{6}$



>

<

Use this method to help you compare:

$1\frac{3}{4}$ and $1\frac{3}{8}$ $1\frac{5}{8}$ and $1\frac{1}{2}$ $2\frac{3}{7}$ and $2\frac{9}{14}$

